


This Week's Weather

Copy the Lows, Highs, Warm Fronts and Cold Fronts for each day on the US Map. Record the weather facts below the day's map.


DATE: _____



Temp: _____
Pressure: _____
Humidity: _____
Wind Spd: _____
Wind Dir.: _____

Visibility: _____
Cloud Type: _____
Cloud Cover: _____
24 Hr. Forecast: _____
Actual Weather: _____


DATE: _____



Temp: _____
Pressure: _____
Humidity: _____
Wind Spd: _____
Wind Dir.: _____

Visibility: _____
Cloud Type: _____
Cloud Cover: _____
24 Hr. Forecast: _____
Actual Weather: _____


DATE: _____



Temp: _____
Pressure: _____
Humidity: _____
Wind Spd: _____
Wind Dir.: _____

Visibility: _____
Cloud Type: _____
Cloud Cover: _____
24 Hr. Forecast: _____
Actual Weather: _____


DATE: _____



Temp: _____
Pressure: _____
Humidity: _____
Wind Spd: _____
Wind Dir.: _____

Visibility: _____
Cloud Type: _____
Cloud Cover: _____
24 Hr. Forecast: _____
Actual Weather: _____

DATE: _____



Temp: _____
Pressure: _____
Humidity: _____
Wind Spd: _____
Wind Dir.: _____

Visibility: _____
Cloud Type: _____
Cloud Cover: _____
24 Hr. Forecast: _____
Actual Weather: _____

SUMMARY QUESTIONS:

1. What were the main weather systems this past week? _____

When did they appear? _____

How long did it take for them to move across the country? _____

2. Look at the weather maps carefully. Pay special attention to your location on the maps. On how many days during the past week have each of the following types of weather or weather systems occurred in your area?

High Pressure _____ Low Pressure _____ Warm Front _____

Cold Front _____ Rain _____ Snow _____

Sleet _____ Hail _____

3. On the weather maps, near which types of weather systems did you usually find precipitation?

4. If you want to predict what the weather in your area will be like tomorrow, in which direction should you look on the weather map today? Explain your answer.

5. What kind of weather did you seem to predict the most for your area this past week?

How often were you correct? _____

What do you need to do to improve your prediction skills? _____

6. What type of weather do the following systems usually bring to an area? (**MEMORIZE!**)

Cold Front: _____

Warm Front: _____

High Pressure: _____

Low Pressure: _____